

**PRACTICE: LESSON 9.2 – SURFACE AREA:** Find LSA & TSA

Name: \_\_\_\_\_

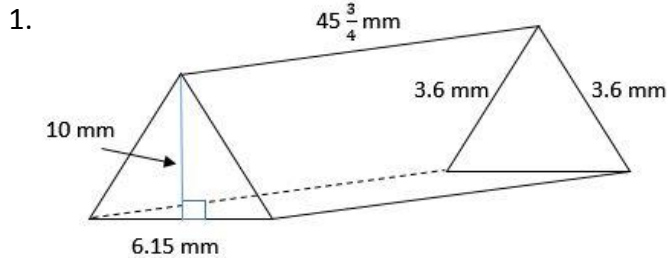
**Learning Goal:** I can find the Lateral Surface Area (LSA) and the Total Surface Area (TSA) for cylinders, rectangular prisms, and triangular prisms.

**Meta de Aprendizaje:** Puedo encontrar el Área de Superficie Lateral (LSA) y el Área de Superficie Total (TSA) para cilindros, prismas rectangulares y prismas triangulares.

**Language Goal:** I can discuss with a partner the difference between Lateral Surface Area and Total Surface Area, then write an explanation.

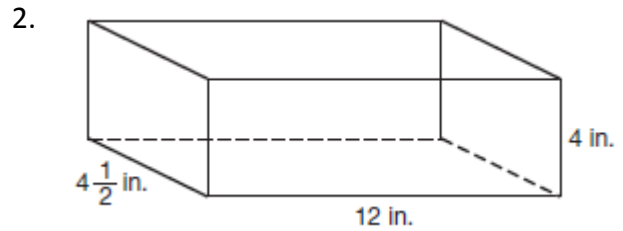
**Lenguaje Objetivo:** Puedo discutir con un compañero la diferencia entre la superficie lateral y la superficie total, luego escribir una explicación.

**DIRECTIONS:** Use your notes and STAAR Chart to find the missing information.



Lateral Surface Area = \_\_\_\_\_

Total Surface Area = \_\_\_\_\_



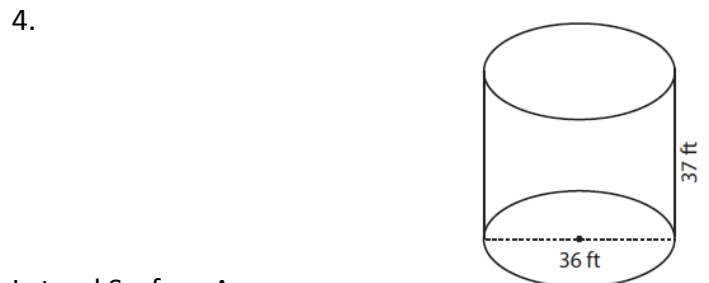
Lateral Surface Area = \_\_\_\_\_

Total Surface Area = \_\_\_\_\_



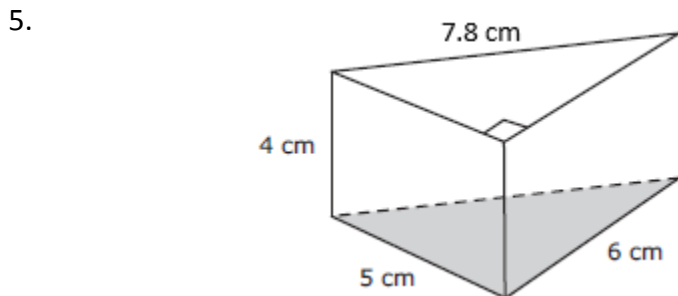
Lateral Surface Area = \_\_\_\_\_

Total Surface Area = \_\_\_\_\_



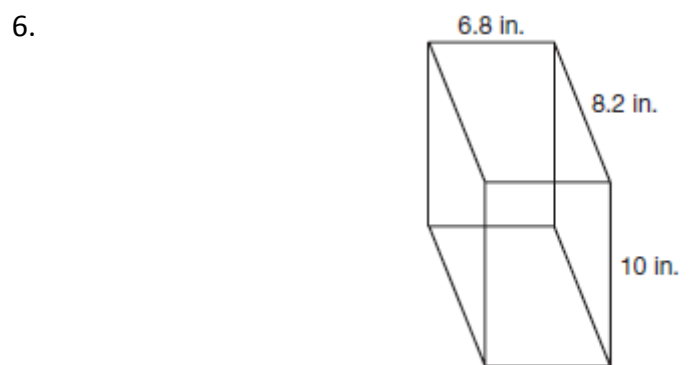
Lateral Surface Area = \_\_\_\_\_

Total Surface Area = \_\_\_\_\_



Lateral Surface Area = \_\_\_\_\_

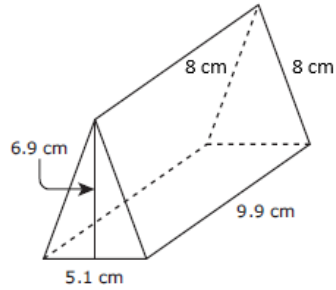
Total Surface Area = \_\_\_\_\_



Lateral Surface Area = \_\_\_\_\_

Total Surface Area = \_\_\_\_\_

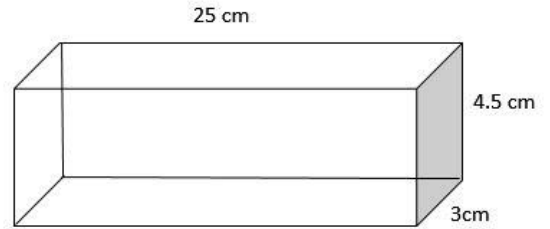
7.



Lateral Surface Area = \_\_\_\_\_

Total Surface Area = \_\_\_\_\_

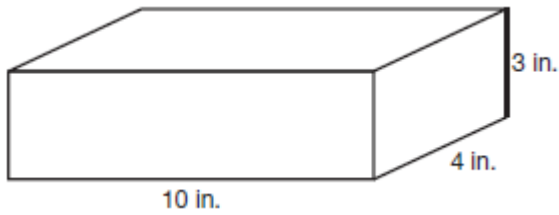
8.



Lateral Surface Area = \_\_\_\_\_

Total Surface Area = \_\_\_\_\_

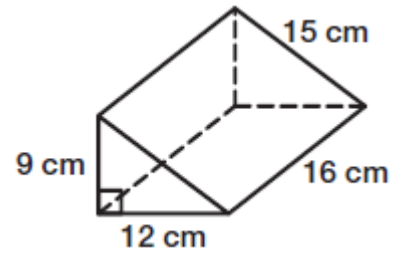
9.



Lateral Surface Area = \_\_\_\_\_

Total Surface Area = \_\_\_\_\_

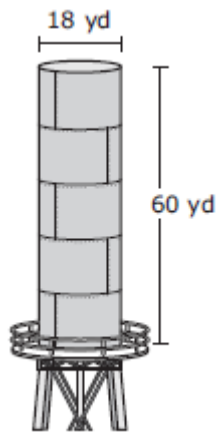
10.



Lateral Surface Area = \_\_\_\_\_

Total Surface Area = \_\_\_\_\_

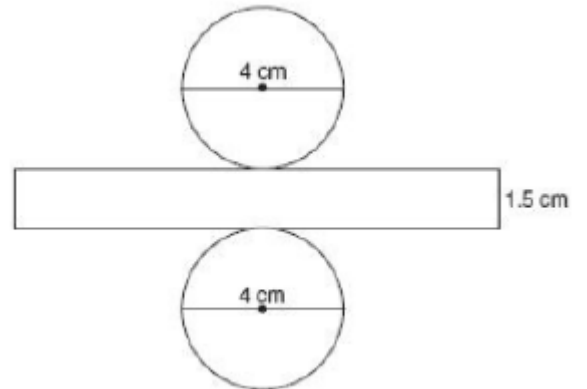
11.



Lateral Surface Area = \_\_\_\_\_

Total Surface Area = \_\_\_\_\_

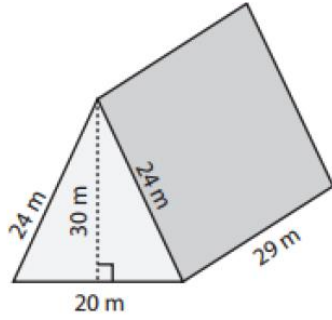
12.



Lateral Surface Area = \_\_\_\_\_

Total Surface Area = \_\_\_\_\_


13.



Lateral Surface Area = \_\_\_\_\_

Total Surface Area = \_\_\_\_\_

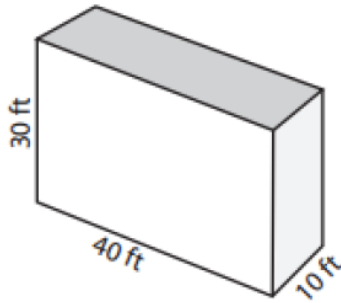
14.



Lateral Surface Area = \_\_\_\_\_

Total Surface Area = \_\_\_\_\_

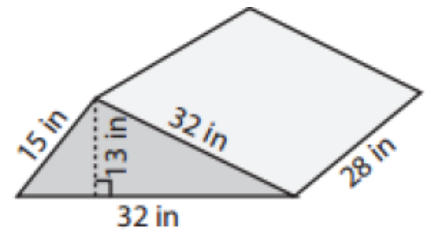
15.



Lateral Surface Area = \_\_\_\_\_

Total Surface Area = \_\_\_\_\_

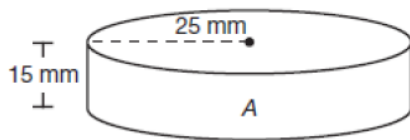
16.



Lateral Surface Area = \_\_\_\_\_

Total Surface Area = \_\_\_\_\_

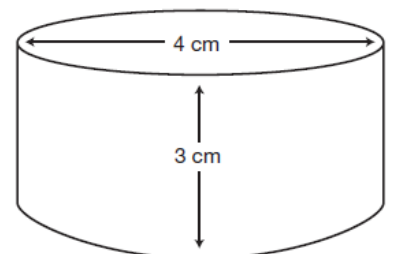
17.



Lateral Surface Area = \_\_\_\_\_

Total Surface Area = \_\_\_\_\_

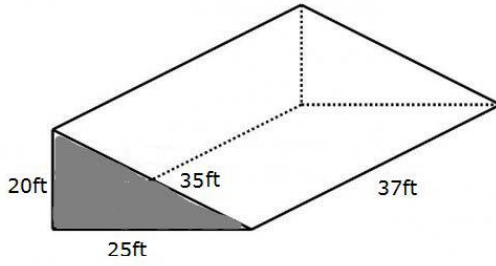
18.



Lateral Surface Area = \_\_\_\_\_

Total Surface Area = \_\_\_\_\_

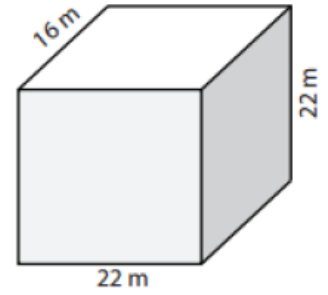
19.



Lateral Surface Area = \_\_\_\_\_

Total Surface Area = \_\_\_\_\_

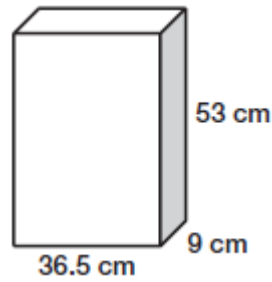
20.



Lateral Surface Area = \_\_\_\_\_

Total Surface Area = \_\_\_\_\_

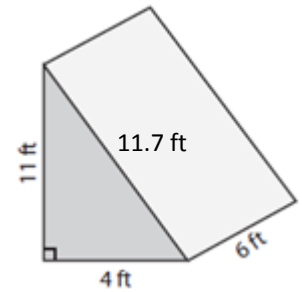
21.



Lateral Surface Area = \_\_\_\_\_

Total Surface Area = \_\_\_\_\_

22.



Lateral Surface Area = \_\_\_\_\_

Total Surface Area = \_\_\_\_\_

23. What is Lateral Surface Area?

---



---

24. What is Total Surface Area?

---



---

25. What is the difference between Lateral Surface Area and Total Surface Area?

---



---